




Name: _____


Can you tell the time to the nearest 5 minutes?
Worksheet 2

1.



1:55

2.




1:55

3.



2:35

4.




5.



5:05

6.




6:00

7.



8.



6:35

9.



6:35

10.



6:35

11.

