




= 5¢

Name: _____

Counting Nickels


Directions: Match the groups of nickels to the correct amounts.




5¢



10¢



15¢



20¢

25¢



30¢



35¢



40¢



45¢



50¢

