

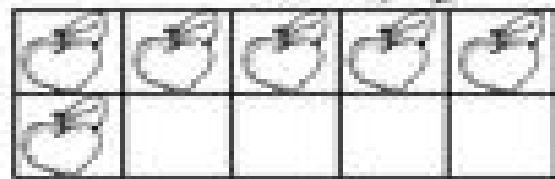
Name _____

Let's Make 10!


Directions: Complete the ten frame to make 10.
Write the number sentence.



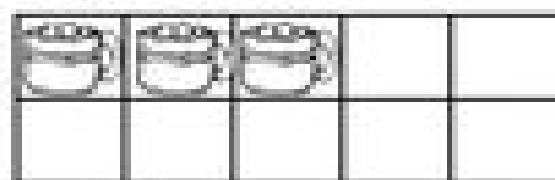
$$\underline{\quad} + \underline{\quad} = 10$$



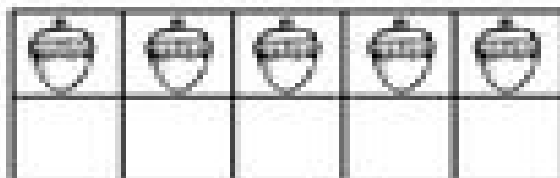
$$\underline{\quad} + \underline{\quad} = 10$$



$$\underline{\quad} + \underline{\quad} = 10$$



$$\underline{\quad} + \underline{\quad} = 10$$



$$\underline{\quad} + \underline{\quad} = 10$$



$$\underline{\quad} + \underline{\quad} = 10$$