

Name \_\_\_\_\_


Date \_\_\_\_\_

### Lines of Symmetry

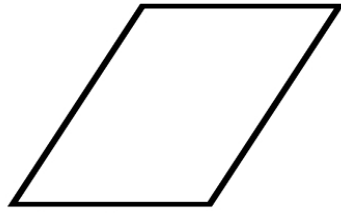
Use a mirror to find the lines of symmetry and draw them.  
Underneath each shape write how many lines of symmetry it has.



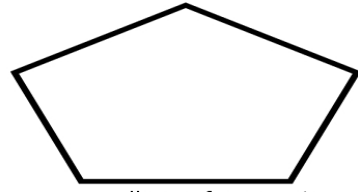
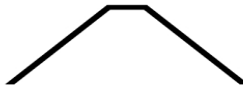
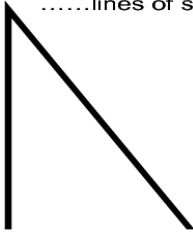
.....lines of symmetry



.....lines of symmetry



.....lines of symmetry



.....lines of symmetry



© symmetry coloring page

