

Name : _____

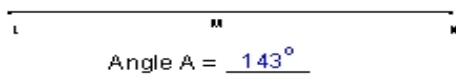
Score : _____

Teacher : _____

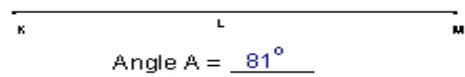
Date : _____

Draw Angle A to the Nearest Degree.

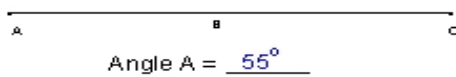
1)



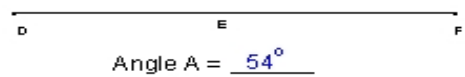
2)



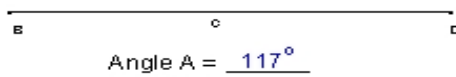
3)



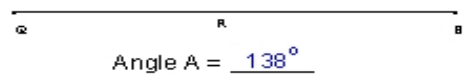
4)



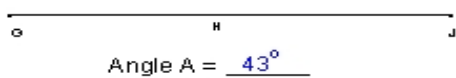
5)



6)



7)



8)

