





Name _____



Dice Addition



Look at the two dice. Add the numbers together. Write the number that tells how many.



 and  _____

 and  _____



 and  _____



 and  _____

 and  _____



 and  _____



 and  _____

 and  _____



 and  _____

 and  _____

 and  _____

 and  _____

 and  _____

 and  _____