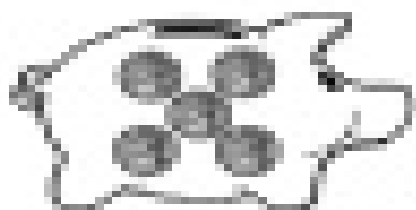


Worksheet 1


Date: _____

Counting Nickels


A nickel is worth 5¢. How many cents did you count by counting by 5's? Counting by 5's starts with the number 5 and adds 5 each time.




_____¢



_____¢




_____¢



_____¢



_____¢



_____¢