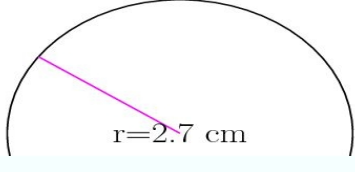
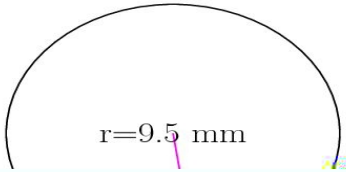
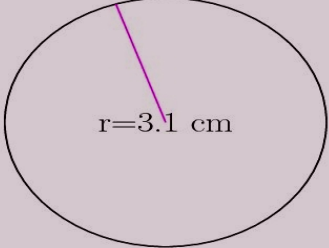
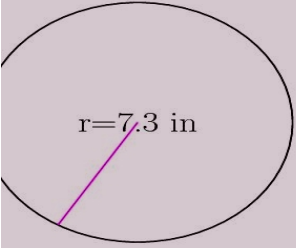


Area and Circumference of Circles (A)

Calculate the area and circumference of each circle.



circumference = _____ circumf = _____
= _____ area = _____ area



circumference = _____ circumference = _____ circumf = _____
= _____ 1 ft