

Name \_\_\_\_\_

Unit: Finding Area and Perimeter

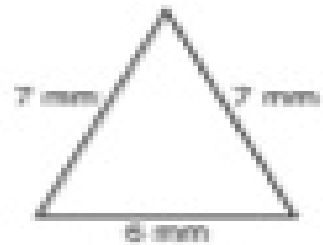
Find the perimeter of each shape.

1.



perimeter = \_\_\_\_\_

2.




perimeter = \_\_\_\_\_

3.



perimeter = \_\_\_\_\_

4.



perimeter = \_\_\_\_\_


Find the area of each shape.

5.



Area = \_\_\_\_\_

6.



Area = \_\_\_\_\_

7.



Area = \_\_\_\_\_