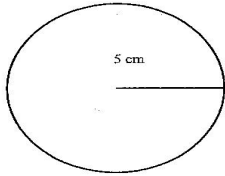


Name _____

AREA OF A CIRCLE #1

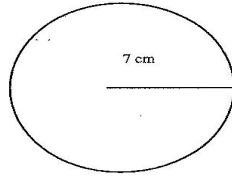
Directions: Find the area of each circle. Write your answer in the space provided.

1)



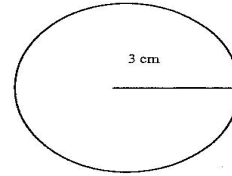
Area _____

2)



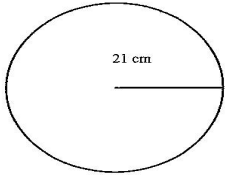
Area _____

3)



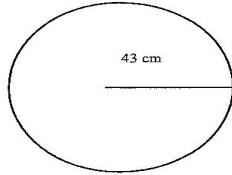
Area _____

4)



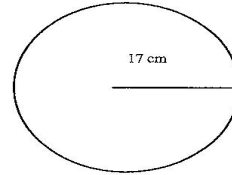
Area _____

5)



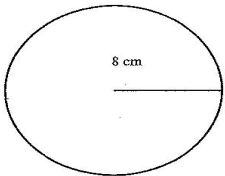
Area _____

6)



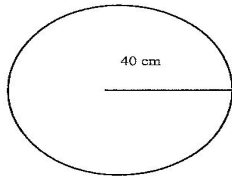
Area _____

7)



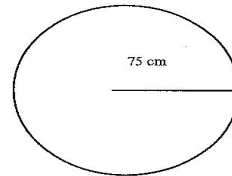
Area _____

8)



Area _____

9)



Area _____