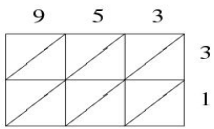
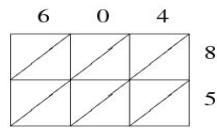


Lattice Multiplication (A)

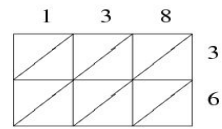
Use lattice multiplication to find each product.



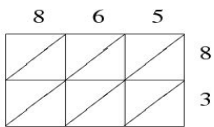
$953 \times 31 = \underline{\hspace{2cm}}$



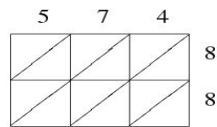
$604 \times 85 = \underline{\hspace{2cm}}$



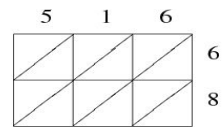
$138 \times 36 = \underline{\hspace{2cm}}$



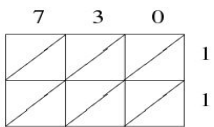
$865 \times 83 = \underline{\hspace{2cm}}$



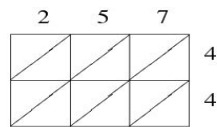
$574 \times 88 = \underline{\hspace{2cm}}$



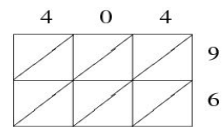
$516 \times 68 = \underline{\hspace{2cm}}$



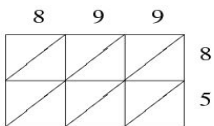
$730 \times 11 = \underline{\hspace{2cm}}$



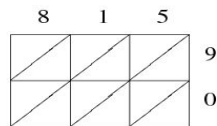
$257 \times 44 = \underline{\hspace{2cm}}$



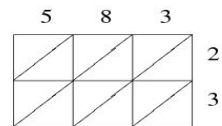
$404 \times 96 = \underline{\hspace{2cm}}$



$899 \times 85 = \underline{\hspace{2cm}}$



$815 \times 90 = \underline{\hspace{2cm}}$



$583 \times 23 = \underline{\hspace{2cm}}$