

Name: _____

Ten-Frames


Directions: Complete the ten frame to make 10.
Complete the number sentence.



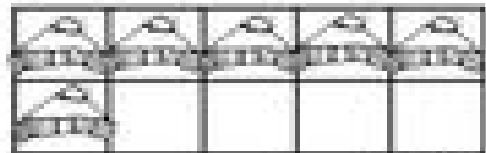
_____ + _____ = 10



_____ + _____ = 10




_____ + _____ = 10



_____ + _____ = 10




_____ + _____ = 10



_____ + _____ = 10



_____ + _____ = 10



_____ + _____ = 10