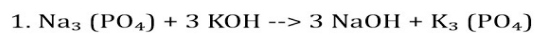


Name answer key

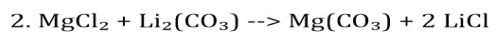
Date \_\_\_\_\_

# TYPES OF CHEMICAL REACTIONS

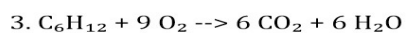
Identify each type of reaction:



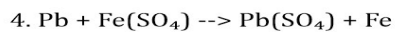
**double displacement**



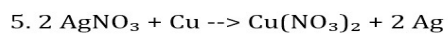
**double displacement**



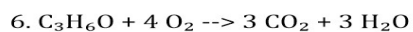
**combustion**



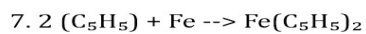
**single displacement**



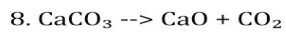
**single displacement**



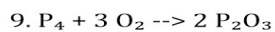
**combustion**



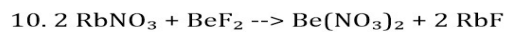
**synthesis**



**decomposition**



**synthesis**



**double displacement**