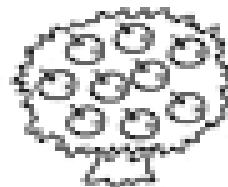
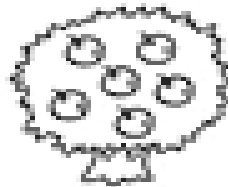




## Subtraction




How many fewer apples are on the left tree than on the right tree?

Write the subtraction sentence.



How many more dimes does Tasha have than Juan?

What is the subtraction sentence?



How many fewer bricks are in the left stack than in the right stack?

What is the subtraction sentence?