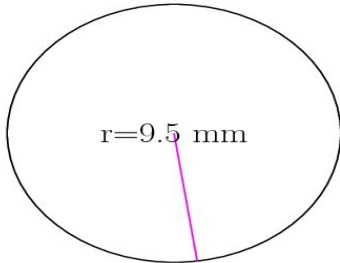
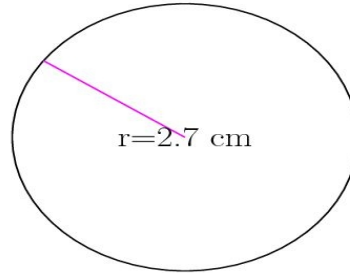


Area and Circumference of Circles (A)

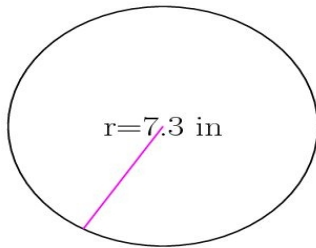
Calculate the area and circumference of each circle.



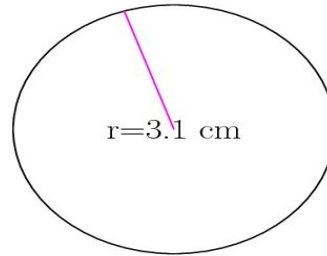
circumference = _____
area = _____



circumference = _____
area = _____



circumference = _____
area = _____



circumference = _____
area = _____