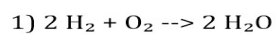


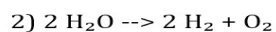
Name _____ **answer key** _____ Date _____

CLASSIFICATION OF CHEMICAL REACTIONS

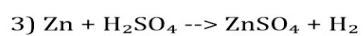
Classify the equations below.



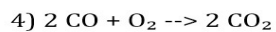
Synthesis



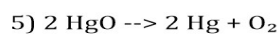
Decomposition



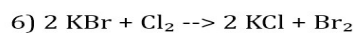
Single Displacement



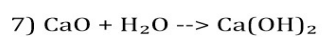
Syntheiss



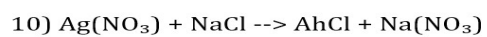
Decomposition



Single Displacement



Syntheiss



Double Displacement