





Properties of polygons

Circle the polygon that has 4 sides of the same length.



Circle the polygon described.


The 3 sides are all the same length.



Exactly 2 pairs of sides are parallel.



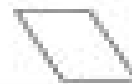
Exactly 1 pair of sides is parallel.



All the sides are of equal length and each side is parallel to one other side.



Each of the sides is a different length.



It has 6 sides of equal length.

