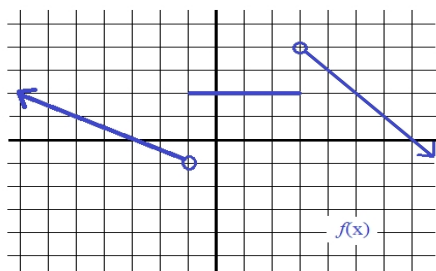
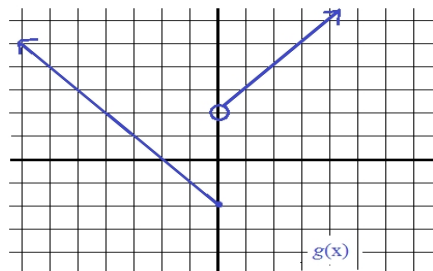


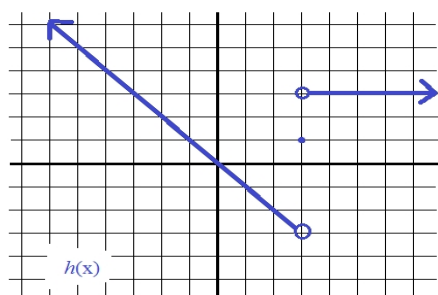
III. Identifying the Piecewise function -- write an expression to describe the graph



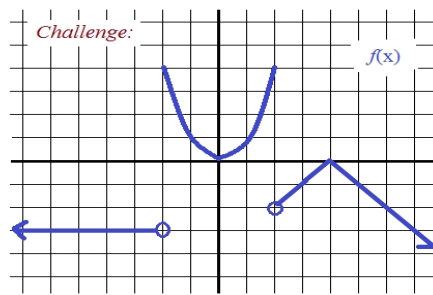
$$f(x) = \left\{ \begin{array}{l} \end{array} \right.$$



$$g(x) = \left\{ \begin{array}{l} \end{array} \right.$$



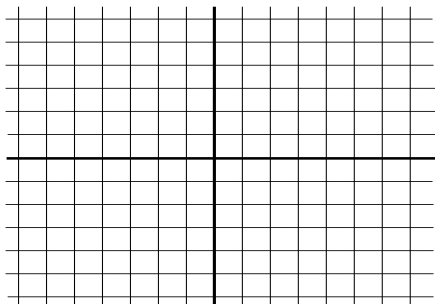
$$h(x) = \left\{ \begin{array}{l} \end{array} \right.$$



$$f(x) = \left\{ \begin{array}{l} \end{array} \right.$$

IV: Graphing Piecewise functions

$$f(x) = \left\{ \begin{array}{l} 4, \text{ if } x < 3 \\ -x + 3, \text{ if } x \geq 3 \end{array} \right.$$



$$g(x) = \left\{ \begin{array}{l} 2x, \text{ if } x < -3 \\ |x|, \text{ if } -3 \leq x < 3 \\ 5, \text{ if } x \geq 3 \end{array} \right.$$

