

Name: _____

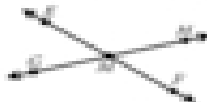
Parallel, Intersecting, and Perpendicular

Parallel Lines




\overleftrightarrow{AB} and \overleftrightarrow{CD} are parallel lines. They never cross, even if they are extended.

Intersecting Lines



\overleftrightarrow{AB} and \overleftrightarrow{CD} are intersecting lines. They cross each other at point J .

Perpendicular Lines



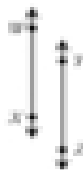
\overleftrightarrow{AB} and \overleftrightarrow{CD} are perpendicular lines. They form right angles where they cross.

Write **parallel** or **not parallel** for each.

1.



2.



3.



Write **parallel**, **intersecting**, or **perpendicular** for each.

4.



5.



6.



7.



8.



9.

