






Name _____

Measurement
Measuring length

Slithering Snakes

Cut out the ruler.
Measure each snake.
Circle the best measurement.



A.		3 inches 4 inches
B.		1 inch 2 inches
C.		5 inches 6 inches
D.		1 inch 2 inches
E.		3 inches 4 inches

