

Name : \_\_\_\_\_

Score : \_\_\_\_\_

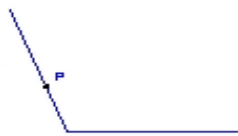
Teacher : \_\_\_\_\_

Date : \_\_\_\_\_

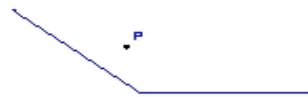
---

State if the given point is interior, exterior or on the angle.

1)



2)



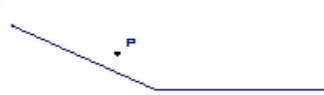
3)



4)



5)



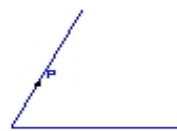
6)



7)



8)



9)

