

Name : \_\_\_\_\_

Score : \_\_\_\_\_

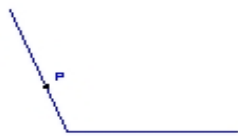
Teacher : \_\_\_\_\_

Date : \_\_\_\_\_

---

State if the given point is interior, exterior or on the angle.

1)



\_\_\_\_\_

2)



\_\_\_\_\_

3)



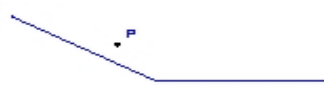
\_\_\_\_\_

4)



\_\_\_\_\_

5)



\_\_\_\_\_

6)



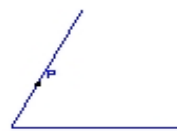
\_\_\_\_\_

7)



\_\_\_\_\_

8)



\_\_\_\_\_

9)



\_\_\_\_\_