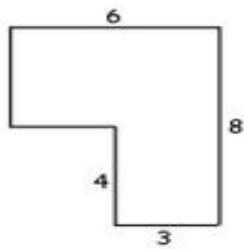
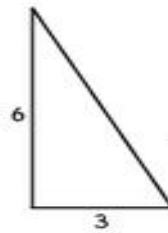


Name: \_\_\_\_\_ Subject: Year 6 Numeracy  
 Date: \_\_\_\_\_ Unit: Area

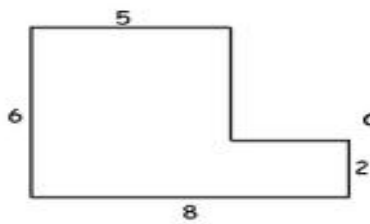
Find the area for the following shapes:



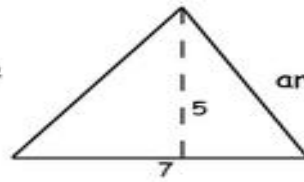
area = \_\_\_\_\_ cm<sup>2</sup>



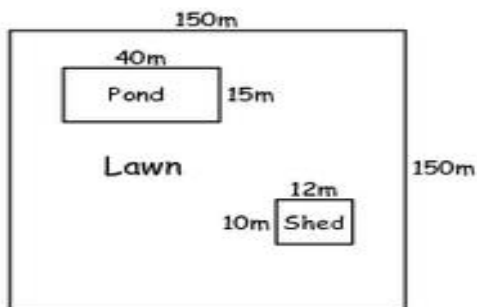
area = \_\_\_\_\_ cm<sup>2</sup>



area = \_\_\_\_\_ cm<sup>2</sup>



area = \_\_\_\_\_ cm<sup>2</sup>



area of pond = \_\_\_\_\_ m<sup>2</sup>

area of shed = \_\_\_\_\_ m<sup>2</sup>

area of lawn = \_\_\_\_\_ m<sup>2</sup>