


Name: \_\_\_\_\_

## Equal Parts

**Directions:** For each shape, divide into the equal parts given. Shade a portion and write the fraction shaded.


4 equal parts



I shaded \_\_\_\_\_

of the shape.


5 equal parts



I shaded \_\_\_\_\_

of the shape.

6 equal parts



I shaded \_\_\_\_\_

of the shape.


8 equal parts



I shaded \_\_\_\_\_

of the shape.


10 equal parts



I shaded \_\_\_\_\_

of the shape.

12 equal parts



I shaded \_\_\_\_\_

of the shape.