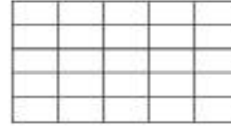
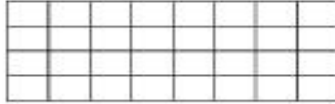


Name: _____

Monday

Math Practice: Area (3.MD.7)

Multiply the side lengths to find the rectangle's area. Write a number sentence to represent each area.




Find the total number of tiles needed.

Connor wants to tile his kitchen with 1 square foot tiles. How many 1 square foot tiles will he need?



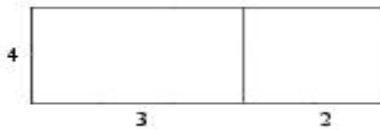
_____ square foot tiles

Sarah wants to tile her bathroom with 1 square foot tiles. How many 1 square foot tiles will she need?

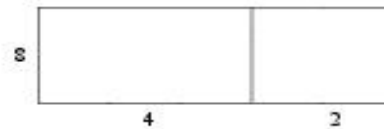


_____ square foot tiles

Use the distributive property to find the rectangle's overall area. Use the space provided to show your work.



Area = _____



Area = _____

A playhouse is pictured below. Decompose the playhouse to find the total area.



Total Area _____