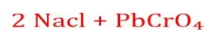
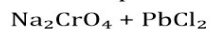


Name _____ **answer key** _____ Date _____

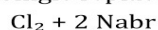
TYPES OF CHEMICAL REACTIONS

Complete each of the following equations as needed to make it the type of reaction indicated.
Be sure to write each formula correctly.

1) Double replacement:



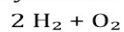
2) Single replacement:



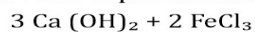
3) Decomposition:



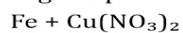
4) Synthesis:



5) Double replacement:



6) Single replacement:



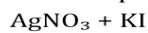
7) Decomposition:



8) Synthesis:



9) Double replacement:



10) Single replacement:

