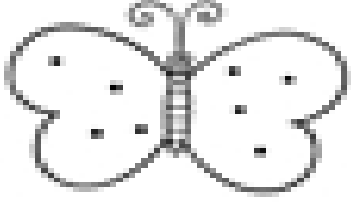
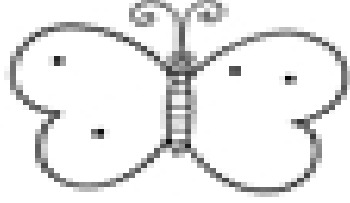


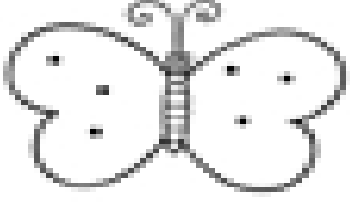
Name: \_\_\_\_\_

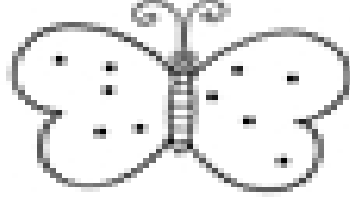
### Butterfly Math

Count the dots on each wing. Then find the sum.

1.   
\_\_\_\_\_ + \_\_\_\_\_ = \_\_\_\_\_

2.   
\_\_\_\_\_ + \_\_\_\_\_ = \_\_\_\_\_

3.   
\_\_\_\_\_ + \_\_\_\_\_ = \_\_\_\_\_

4.   
\_\_\_\_\_ + \_\_\_\_\_ = \_\_\_\_\_