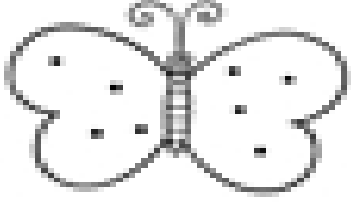
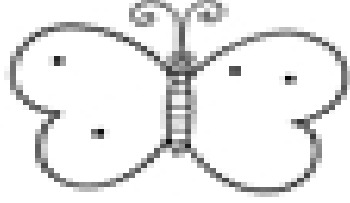


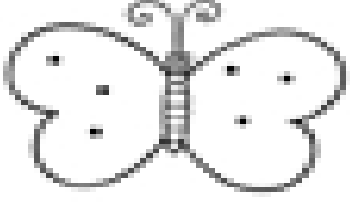
Name: _____

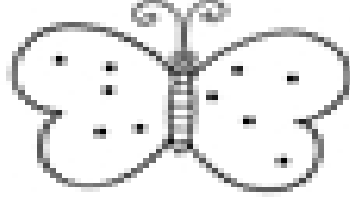
Butterfly Math

Count the dots on each wing. Then find the sum.

1.  $\underline{\quad} + \underline{\quad} = \underline{\quad}$

2.  $\underline{\quad} + \underline{\quad} = \underline{\quad}$

3.  $\underline{\quad} + \underline{\quad} = \underline{\quad}$

4.  $\underline{\quad} + \underline{\quad} = \underline{\quad}$