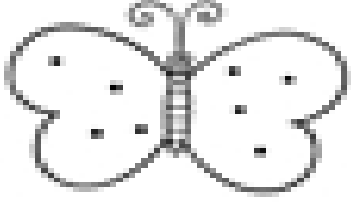
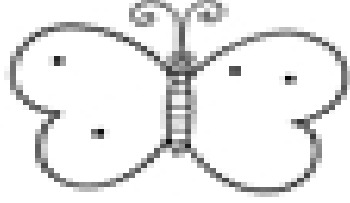


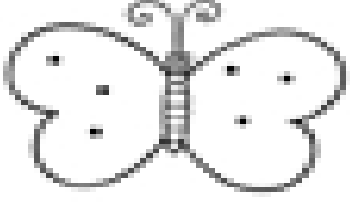
Name: _____

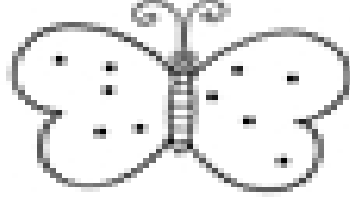
Butterfly Math

Count the dots on each wing. Then find the sum.

1. 
_____ + _____ = _____

2. 
_____ + _____ = _____

3. 
_____ + _____ = _____

4. 
_____ + _____ = _____