


QUESTION

1. A circle with center O and radius 5 cm.



2. A rectangle with length 10 cm and width 5 cm.




3. A square with side length 5 cm.


4. A square with side length 5 cm.




5. A rectangle with length 10 cm and width 5 cm.



6. A square with side length 5 cm.



7. A square with side length 5 cm.



ANSWER