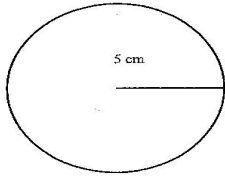


Name \_\_\_\_\_

**AREA OF A CIRCLE #1**

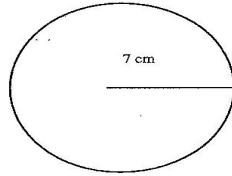
**Directions:** Find the area of each circle. Write your answer in the space provided.

1)



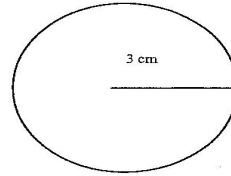
Area \_\_\_\_\_

2)



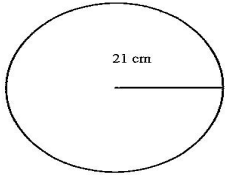
Area \_\_\_\_\_

3)



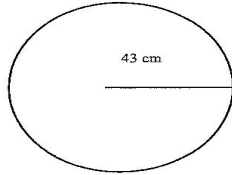
Area \_\_\_\_\_

4)



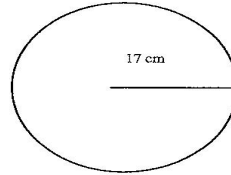
Area \_\_\_\_\_

5)



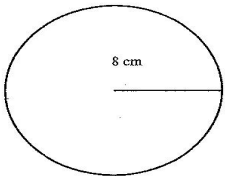
Area \_\_\_\_\_

6)



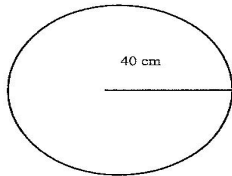
Area \_\_\_\_\_

7)



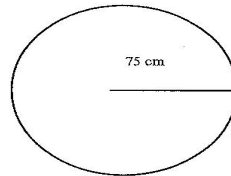
Area \_\_\_\_\_

8)



Area \_\_\_\_\_

9)



Area \_\_\_\_\_