






Name \_\_\_\_\_

Period \_\_\_\_\_

**Identify That Rock – Complete the table.**

Picture	Rock Name	Rock Group	Formation
 <p>1. This is a rock with a coarse crystalline texture.</p>	<p>Choose the correct rock name:</p> <p>A. Basalt            B. Granite            C. Limestone            D. Gneiss            E. Conglomerate</p>	<p>Choose igneous, Metamorphic or Sedimentary</p>	<p>Show the rock group from:</p>
 <p>2. This is a rock with distinct horizontal bedding.</p>	<p>Choose the correct rock name:</p> <p>A. Basalt            B. Granite            C. Limestone            D. Gneiss            E. Conglomerate</p>		
 <p>3. This is a rock with a complex crystalline texture.</p>	<p>Choose the correct rock name:</p> <p>A. Basalt            B. Granite            C. Limestone            D. Gneiss            E. Conglomerate</p>		
 <p>4. This is a rock with a coarse pebbly texture.</p>	<p>Choose the correct rock name:</p> <p>A. Basalt            B. Granite            C. Limestone            D. Gneiss            E. Conglomerate</p>		
 <p>5. This is a rock with a coarse crystalline texture.</p>	<p>Choose the correct rock name:</p> <p>A. Basalt            B. Granite            C. Limestone            D. Gneiss            E. Conglomerate</p>		