


QUESTION




Find the surface area of a square-based pyramid with a base side length of 6 cm and a height of 4 cm.

ANSWER


1.




2.




3.



4.



5.



6.

