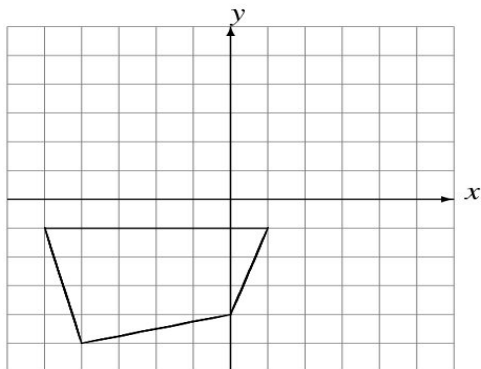


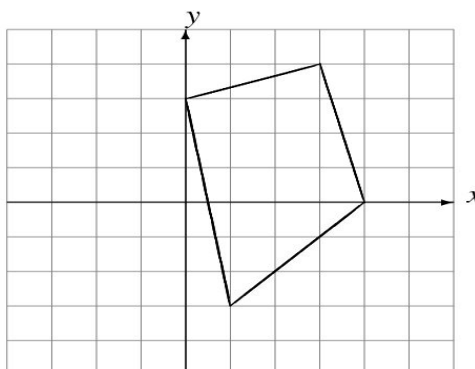
## Rotations (H)

Draw the rotated image.

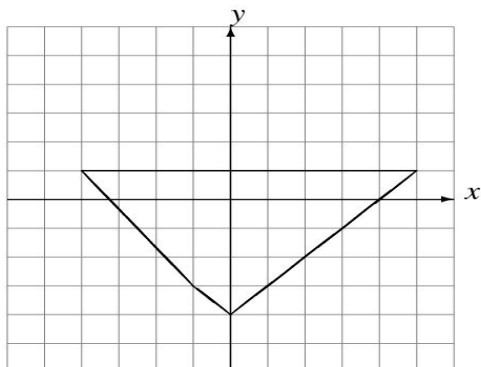
Rotate  $180^\circ$  about  $(0, 0)$ .



Rotate  $90^\circ$  clockwise about  $(0, 0)$ .



Rotate  $180^\circ$  about  $(0, 0)$ .



Rotate  $180^\circ$  about  $(0, 0)$ .

