











Name: _____

Polygons

Polygons are two-dimensional shapes that have more than 2 sides, are closed, and have only straight lines that never cross.

Directions: Label each shape a polygon or non-polygon. Write why the non-polygons do not fit the criteria.

1. 	<hr/> <hr/> <hr/>
6. 	<hr/> <hr/> <hr/>
2. 	<hr/> <hr/> <hr/>
7. 	<hr/> <hr/> <hr/>
3. 	<hr/> <hr/> <hr/>
8. 	<hr/> <hr/> <hr/>
4. 	<hr/> <hr/> <hr/>
9. 	<hr/> <hr/> <hr/>
5. 	<hr/> <hr/> <hr/>
10. 	<hr/> <hr/> <hr/>