



Name _____

PRACTICE


Color some cubes in a row red and some blue. Complete each number bond. Then write an addition sentence.




____ + ____ = ____




____ + ____ = ____




____ + ____ = ____




____ + ____ = ____




____ + ____ = ____



____ + ____ = ____



____ + ____ = ____



____ + ____ = ____