


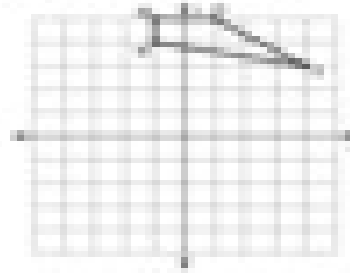
Reflections

Graph the image of the figure using the transformation given.


1) reflection across $y = 0$



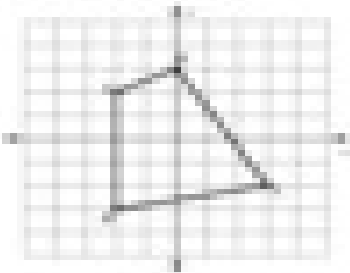
2) reflection across the y -axis




3) reflection across $y = 1$



4) reflection across $y = -2$



5) reflection across $y = 2$



6) reflection across $y = 3$

