

Name \_\_\_\_\_

Date \_\_\_\_\_

Directions: Identify the type of line shown.



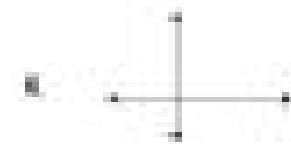
\_\_\_\_\_




\_\_\_\_\_




\_\_\_\_\_



\_\_\_\_\_



\_\_\_\_\_



\_\_\_\_\_



\_\_\_\_\_



\_\_\_\_\_



\_\_\_\_\_

10. Classify a ray. \_\_\_\_\_

11. Classify a line segment. \_\_\_\_\_

12. Classify a line. \_\_\_\_\_