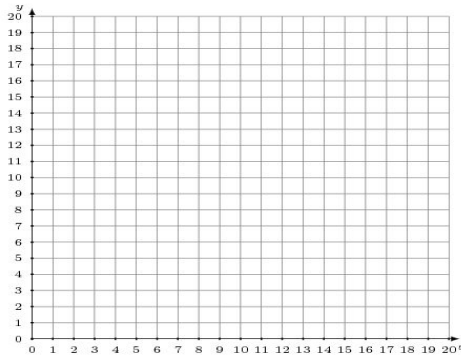


Graphing Linear Systems (J)

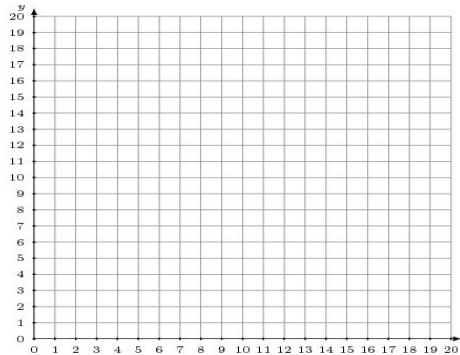
Graph each system and identify its solution.

1.
$$y = \frac{5}{17}x + 12$$
$$13x - 17y = -68$$



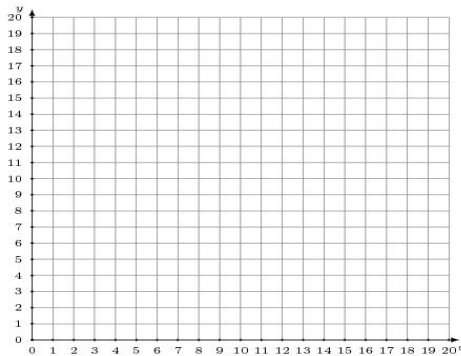
Solution: (____, ____)

2.
$$y = \frac{4}{7}x + 9$$
$$y = \frac{5}{14}x + 12$$



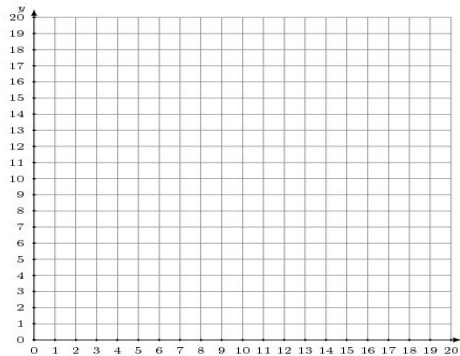
Solution: (____, ____)

3.
$$3x - 16y = -80$$
$$5x - 16y = -48$$



Solution: (____, ____)

4.
$$3x + 4y = 56$$
$$y = -\frac{7}{4}x + 18$$



Solution: (____, ____)