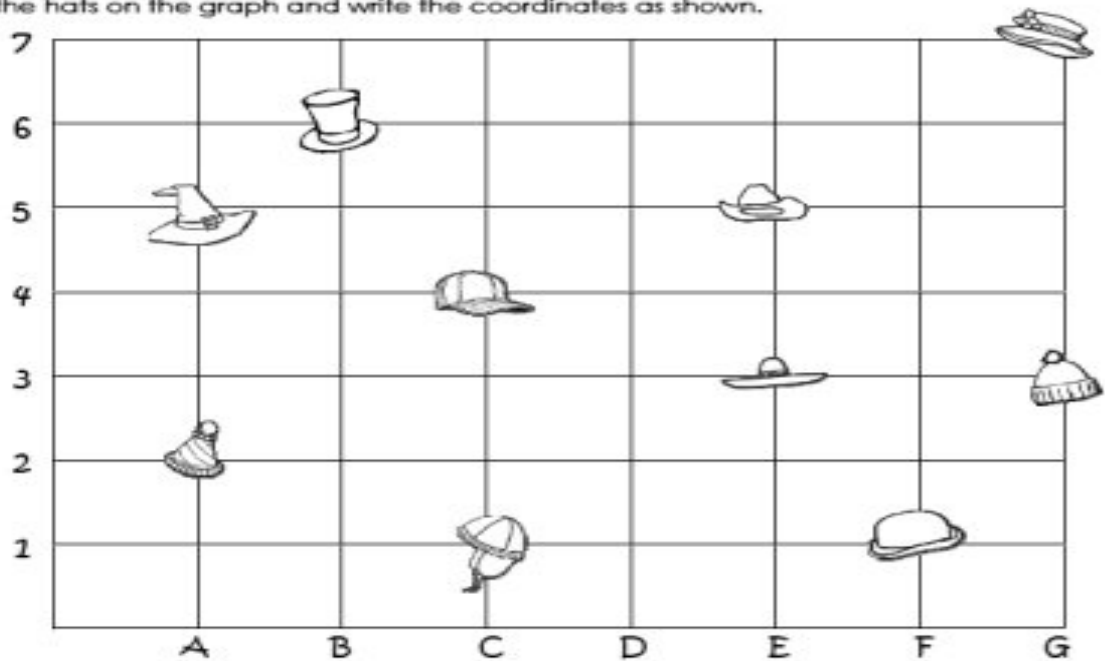







## All Kinds of Hats Graphing Fun

Find the hats on the graph and write the coordinates as shown.



1.  is at A, 2
2.  is at \_\_\_\_\_, \_\_\_\_\_
3.  is at \_\_\_\_\_, \_\_\_\_\_
4.  is at \_\_\_\_\_, \_\_\_\_\_
5.  is at \_\_\_\_\_, \_\_\_\_\_

6.  is at \_\_\_\_\_, \_\_\_\_\_
7.  is at \_\_\_\_\_, \_\_\_\_\_
8.  is at \_\_\_\_\_, \_\_\_\_\_
9.  are at \_\_\_\_\_, \_\_\_\_\_
10.  is at \_\_\_\_\_, \_\_\_\_\_