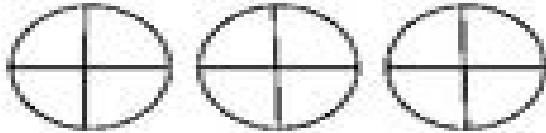


Name _____ Date _____

1. Shade seven fourths. Write this as a fraction and a mixed number.



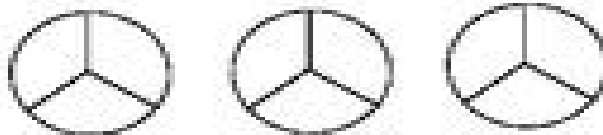
Fraction

$$\frac{\square}{\square}$$

Mixed Number

$$\text{---} \frac{\square}{\square}$$

2. Shade eight thirds. Write this as a fraction and a mixed number.




Fraction

$$\frac{\square}{\square}$$

Mixed Number

$$\text{---} \frac{\square}{\square}$$

3. Shade six fifths. Write this as a fraction and a mixed number.



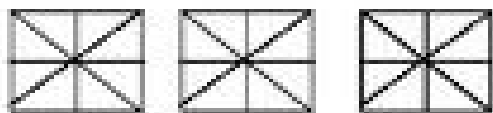
Fraction

$$\frac{\square}{\square}$$

Mixed Number

$$\text{---} \frac{\square}{\square}$$

4. Shade eighteen eighths. Write this as a fraction and a mixed number.



Fraction

$$\frac{\square}{\square}$$

Mixed Number

$$\text{---} \frac{\square}{\square}$$