



What's Missing?


Fill in the missing info.




$$\boxed{4} + \boxed{1} = \boxed{5}$$




$$\boxed{5} + \boxed{} = \boxed{11}$$




$$\boxed{} + \boxed{6} = \boxed{8}$$




$$\boxed{} + \boxed{4} = \boxed{10}$$




$$\boxed{3} + \boxed{} = \boxed{9}$$




$$\boxed{2} + \boxed{} = \boxed{6}$$



$$\boxed{1} + \boxed{} = \boxed{7}$$



$$\boxed{6} + \boxed{} = \boxed{12}$$



$$\boxed{} + \boxed{3} = \boxed{4}$$