
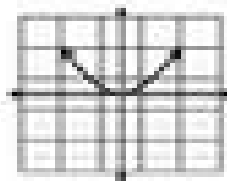



**KEY** Write the Domain and Range for each graph. *Answers 1-16*




- D:  $[0, \infty)$   
 R:  $[0, \infty)$



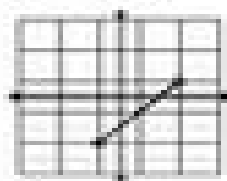
- D:  $[-1, 1]$   
 R:  $[1, \infty)$



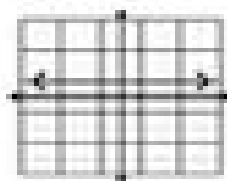
- D:  $[-1, 1]$   
 R:  $[-1, 1]$



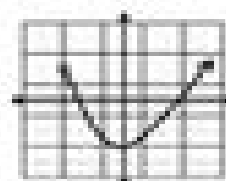
- D:  $\{2\}$   
 R:  $[1, 3]$



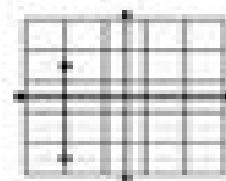
- D:  $[-1, 1]$   
 R:  $[-1, 1]$



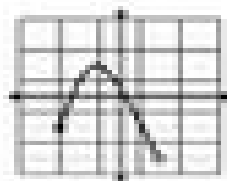
- D:  $(-\infty, \infty)$   
 R:  $\{1\}$



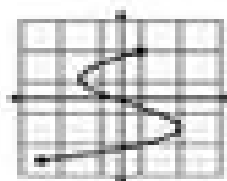
- D:  $[-1, 1]$   
 R:  $[-1, \infty)$



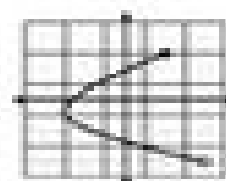
- D:  $\{1\}$   
 R:  $\{-1, 1\}$



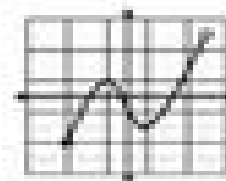
- D:  $[-1, 1]$   
 R:  $[-1, 1]$



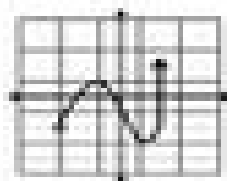
- D:  $[-1, 1]$   
 R:  $[-1, 1]$



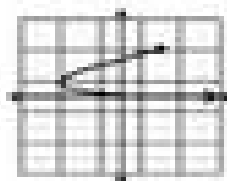
- D:  $[-1, 1]$   
 R:  $[-1, 1]$



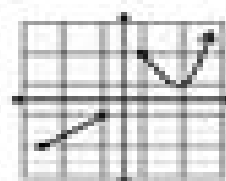
- D:  $[-1, 1]$   
 R:  $[-1, 1]$




- D:  $[-1, 1]$   
 R:  $[-1, 1]$



- D:  $[0, \infty)$   
 R:  $[0, 1]$



- D:  $[-1, 1] \cup [1, \infty)$   
 R:  $[-1, 1] \cup [1, \infty)$



- D:  $[-1, 1] \cup [0, \infty)$   
 R:  $[-1, 1] \cup [0, \infty)$