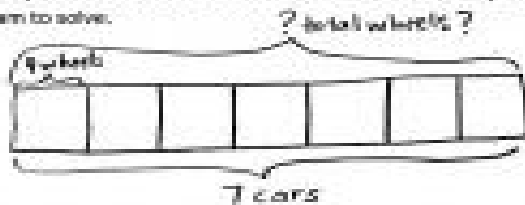


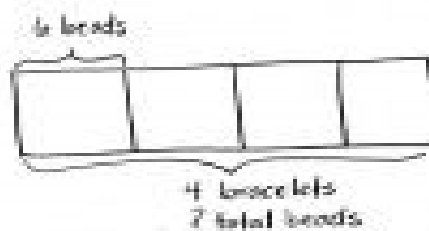
2. Mr. Schmidt replaces each of the 4 wheels on 7 cars. How many wheels does he replace? Draw and label a tape diagram to solve.



$$7 \times 4 = 28$$

Mr. Schmidt replaces 28 wheels altogether.


3. Trina makes 4 bracelets. Each bracelet has 6 beads. Draw and label a tape diagram to show the total number of beads Trina uses.



$$4 \times 6 = 24$$

Trina uses 24 beads total.

4. Find the total number of sides on 5 rectangles.



$$5 \times 4 = 20$$

There are 20 sides on 5 rectangles.