






Name _____

CCSS 2.NBT.1 Understand place value

Place Value

Directions: Write how many tens and ones. Then write the number.

 <p>___ tens ___ ones</p> <p>___ + ___ = ___</p>	 <p>___ tens ___ ones</p> <p>___ + ___ = ___</p>
 <p>___ tens ___ ones</p> <p>___ + ___ = ___</p>	 <p>___ tens ___ ones</p> <p>___ + ___ = ___</p>
 <p>___ tens ___ ones</p> <p>___ + ___ = ___</p>	 <p>___ tens ___ ones</p> <p>___ + ___ = ___</p>