



Name: _____

Date: _____


Read both clocks. Write how much time has elapsed.




1. Elapsed Time: _____




2. Elapsed Time: _____




3. Elapsed Time: _____



4. Elapsed Time: _____



5. Elapsed Time: _____



6. Elapsed Time: _____



7. Elapsed Time: _____



8. Elapsed Time: _____

