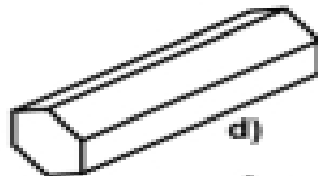
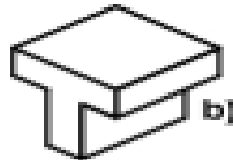
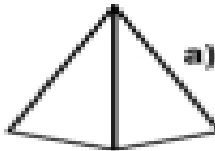


Join each shape to its name.



Cube

Triangular Prism

Cuboid

Hexagonal Prism

Cylinder

Pentagonal Prism

T Shaped Prism

Octagonal Prism

Pyramid

Name: _____

Page 1