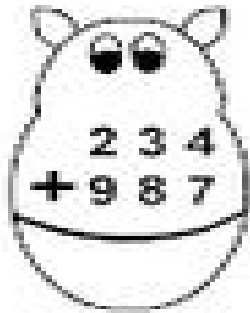




Name

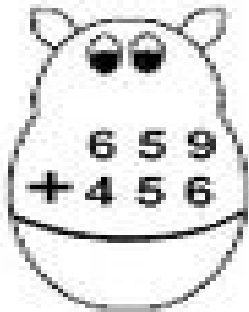
Date

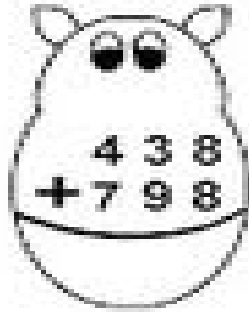
Find the sums.

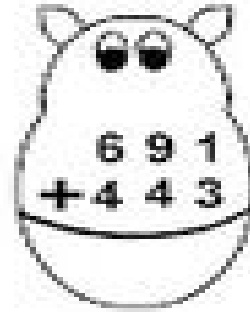

$$\begin{array}{r} 234 \\ +987 \\ \hline \end{array}$$

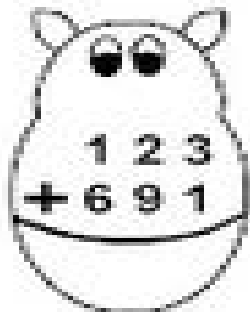

$$\begin{array}{r} 765 \\ +679 \\ \hline \end{array}$$

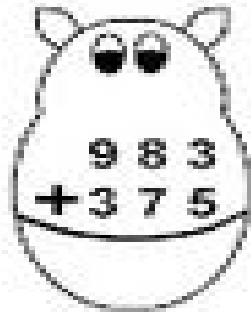

$$\begin{array}{r} 209 \\ +453 \\ \hline \end{array}$$

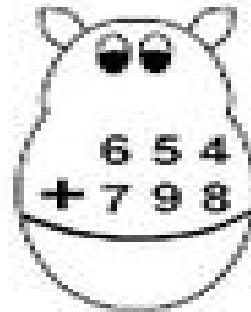

$$\begin{array}{r} 659 \\ +456 \\ \hline \end{array}$$


$$\begin{array}{r} 438 \\ +798 \\ \hline \end{array}$$


$$\begin{array}{r} 691 \\ +443 \\ \hline \end{array}$$


$$\begin{array}{r} 123 \\ +691 \\ \hline \end{array}$$


$$\begin{array}{r} 983 \\ +375 \\ \hline \end{array}$$


$$\begin{array}{r} 654 \\ +798 \\ \hline \end{array}$$