










How Many Snowflakes?  
Instructions: Count. Circle

|   |   |   |
|---|---|---|
| <b>1</b><br>   | <b>2</b><br>   | <b>3</b><br>   |
| 6 2 9   | 3 7 5   | 2 4 5   |
| <b>4</b><br>  | <b>5</b><br>  | <b>6</b><br>  |
| 1 5 4   | 5 6 8   | 2 3 9   |
| <b>7</b><br> | <b>8</b><br> | <b>9</b><br> |
| 8 9 10  | 3 0 1   | 2 3 5   |