

Name : _____

Score : _____

Teacher : _____

Date : _____

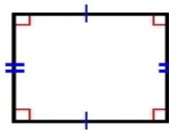
Identify the Type For Each Qualrilateral.

1)



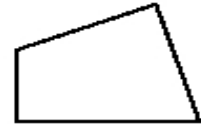
Type: _____

2)



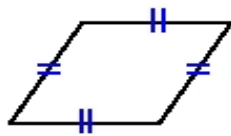
Type: _____

3)



Type: _____

4)



Type: _____

5)



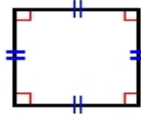
Type: _____

6)



Type: _____

7)



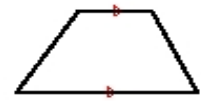
Type: _____

8)



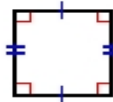
Type: _____

9)



Type: _____

10)



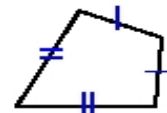
Type: _____

11)



Type: _____

12)



Type: _____